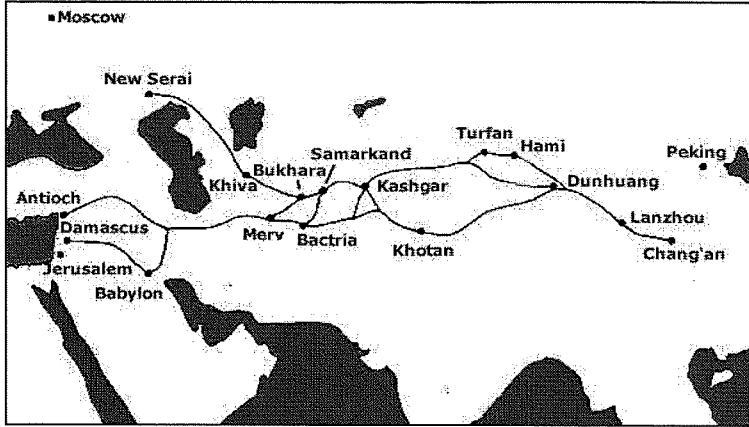


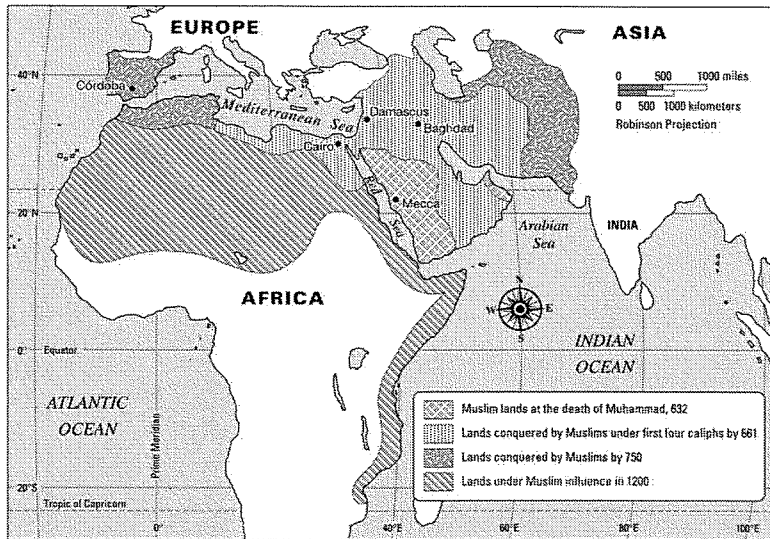
3rd Quarter Exam Review

Directions: Complete the following charts, graphs, maps, questions, and images identifications without looking at your notes. Once you've tried every questions without looking go back and look things up using your notes and textbook.






MAP 1

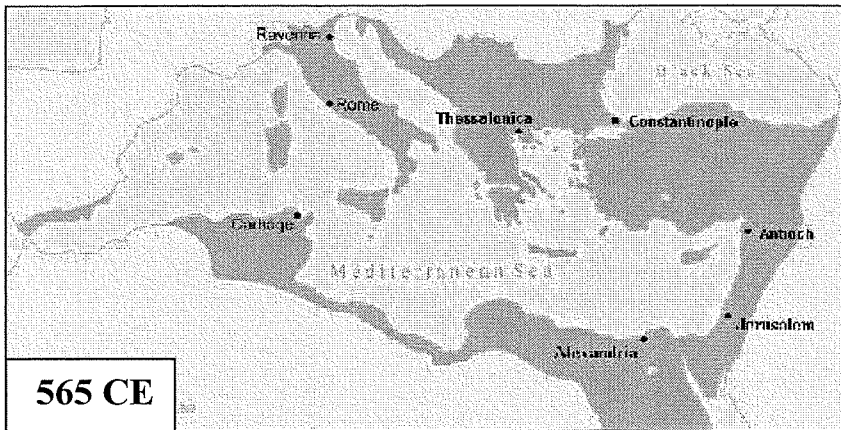
1. Identify the major trade route shown on this map.
2. List three major empires connected by this trade route.
3. List THREE commodities carried on this route.



MAP 2

1. This map shows the spread of which religion?
2. Describe the height of the expansion in the west.
3. Describe the height of the expansion on the east.
4. Why did the religion spread so quickly?

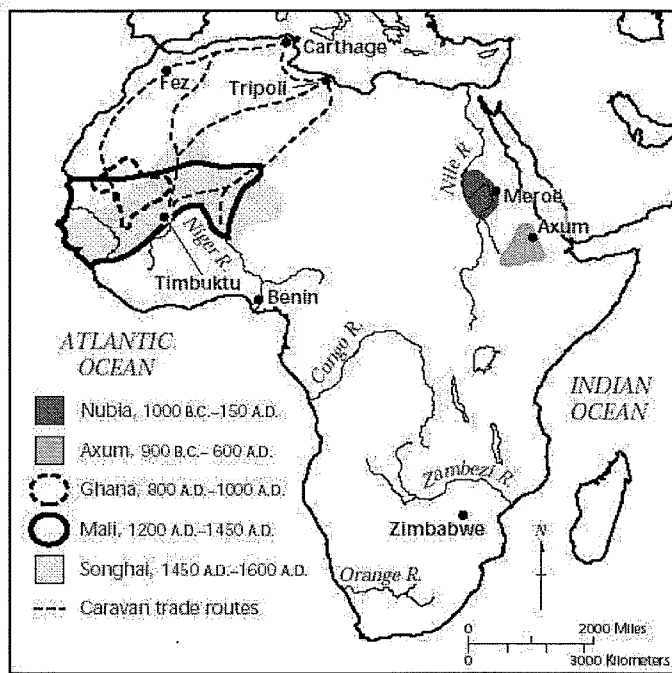
<p>Name this building?</p>	 <p>1.</p>	 <p>5.</p>	 <p>9.</p>
<p>When was it built? Or Who built it?</p>	<p>2.</p>	<p>6.</p>	<p>10.</p>
<p>In what city is it located?</p>	<p>3.</p>	<p>7.</p>	<p>11.</p>
<p>What is its purpose?</p>	<p>4.</p>	<p>8.</p>	<p>12.</p>



MAP 3

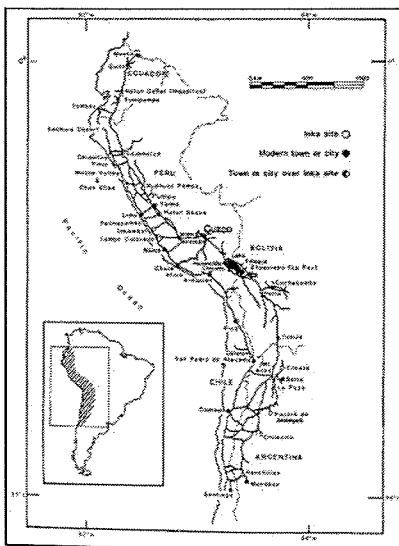
1. Which **empire** is being shown on this map at its height (make sure you take note of the year)?
2. What is this empire's capital?
3. Who was their ruler in AD 565?

4. Which group brought this empire down and in what year did they conquer?



MAP 4

1. This is a map of which **continent**?
2. List all **kingdoms and empires** noted on this map have we studied?
3. What **cultural items** were brought to West Africa by the caravan trade routes?
4. Describe the location of Aksum (where is it in Africa? What bodies of water is Aksum near?) What is culturally unique about Aksum?



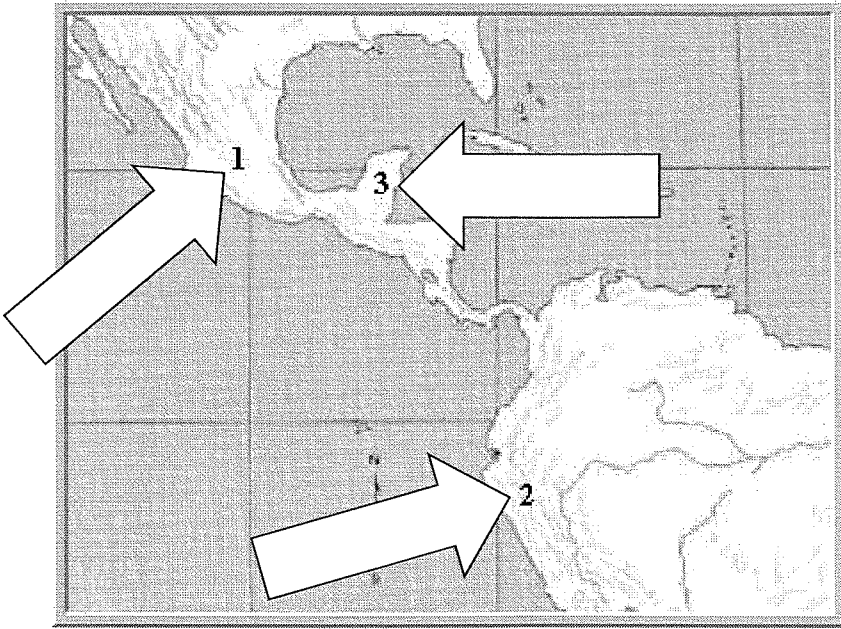
MAP 5

1. Which **continent** is being show on this map?
2. What **civilization** built a **large empire** in the selected region?
3. What do the lines on the map represent?

MAP 6

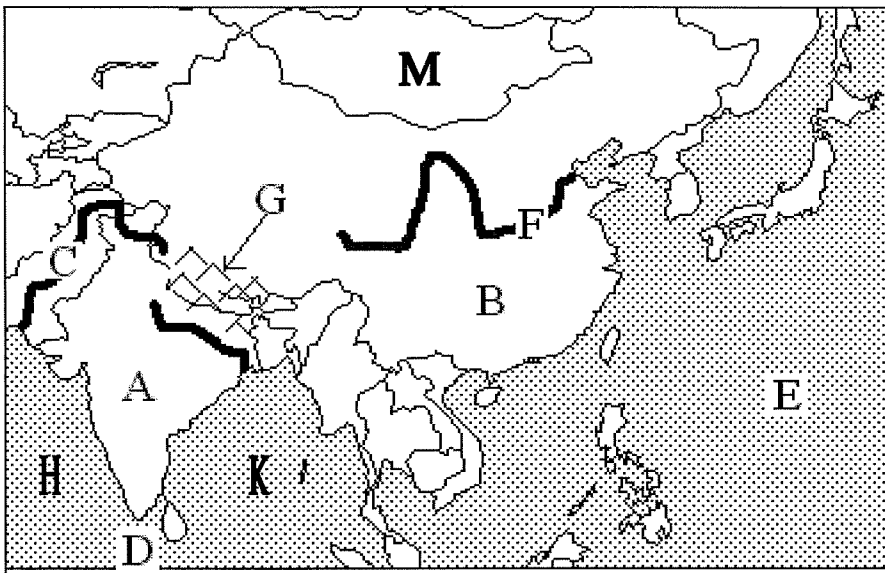
1. **Fill in the arrows** showing the location of the three major pre-Columbian civilizations.

2. **List the capital or major city-state** for the civilization you wrote in each arrow






- 1.
- 2.
- 3.

Map 7



1. _____ China
2. _____ Himalayan Mountains
3. _____ India
4. _____ Indian Ocean
5. _____ Indus River
6. _____ Pacific Ocean
7. _____ Yellow River
8. _____ Arabian Sea
9. _____ Bay of Bengal
10. _____ Mongolia

Name this structure or innovation? Who built it? Where is it located? What is its purpose?			
	1.	5.	9.
	2.	6.	10.
	3.	7.	11.
4.	8.	12.	

Directions: Each of the following terms are related to one of the units covered in the third quarter. To study for your exam, review each term and know what each term is or means, and how it relates to the broader topic.

1. Classical China and India

Silk Road-

Confucianism-

Civil Service (203)-

Daoism/Taoism-

Yin and Yang

Trade Goods Produced in China and Traded to other regions-

Han Dynasty-

Achievements/trade items of Classical China-

Chandragupta (189)-

Mauryan-

Asoka (What philosophy did he seek to spread?)-

Gupta Empire-

Achievements of Gupta Empire in India's golden age-

2. Islam

Islam-

Muslim-

Allah-

Mosque-

Muhammad-

Mecca-

Medina-

The Five Pillars of Islam-

Hajj-

Qur'an-

Arabic-

Ka'bah (location and significance)-

Dome of the Rock (location and significance)-

Umayyads-

Abbasids-

Why did the Sunni and Shi'a split?

Achievements of Muslim golden age-

Battle of Tours-

4. Byzantines

Who are the Byzantines?

3 accomplishments of Justinian:

2 types of Byzantine Art-

Hagia Sophia-

What happened in 1054?

What arguments led to this event?

Attributes of the Eastern Orthodox Religion

Explain the significance of 1453?

Why did Saint Cyril create the Cyrillic Alphabet?

What St. Cyril his ultimate goal?

5. Russians

How did Russia come to be? -----+----- = Russ

Vladimir (What did he bring to Russia?)-

Moscow-

Effects of the Mongols on Russia-

Ivan III-

6. Africa (for "locations" be sure to know geographic features like rivers, seas, and mountains)

Location and religion of Axum

Terrace farming

King Ezana

Location and trade of Mali, Ghana, Songhai

Mansa Musa

Religion in West Africa

Timbuktu

Location and trade of Great Zimbabwe

7. Americas

Maya City-States location

Chichen Itza

Glyphs

Aztec location

Human Sacrifice

Aztec Empire Calendar

Tenochtitlan

Inca Empire location

Cuzco

Machu Picchu

High altitude farming

What attributes do the Maya, Aztec and Inca have in common?